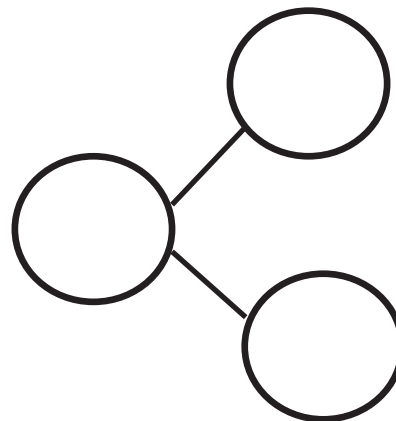



Name _____

Date _____

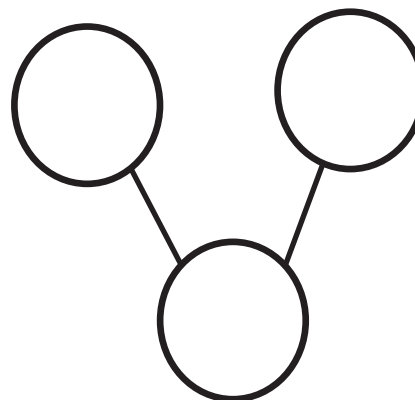
There are 6 animals. 4 are tigers, and 2 are lions.
Fill in the number sentences and the number bond.



is and

= +

There 3 are monkeys and 3 elephants. All 6 animals are going into the circus tent. Fill in the number sentences and the number bond.



and is

+ =

On the back of your paper, draw some animals. Make a number bond to match your picture.

Name _____

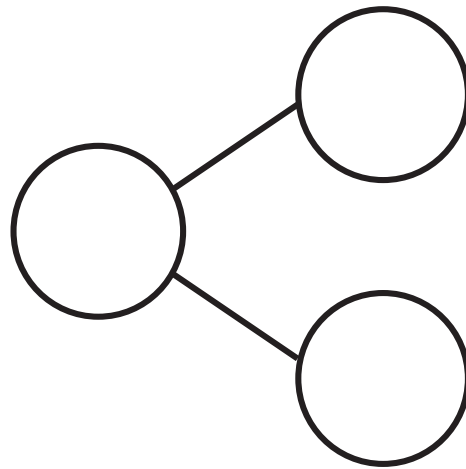
Date _____



There are 7 bears. 3 bears have bowties. 4 bears have hearts. Fill in the number sentences and the number bond.

$$\square = \square + \square$$

$$\square + \square = \square$$



5 bears have scarves on, and 2 do not. There are 7 bears.

Write a number sentence that tells about the bears.

$$\square = \square + \square$$


On the back of your paper, draw a picture about the 7 bears. Write a number sentence, and make a number bond to go with it.

Name _____

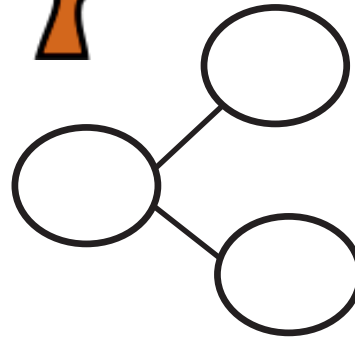
Date _____





There are 8 trees. 5 are palm trees, and 3 are apple trees. Fill in the number sentences and the number bond.



$$\begin{array}{r} \square = \square + \square \\ \square + \square = \square \end{array}$$



There are 8 trees. 4 are oak trees, and 4 are spruce trees. Fill in the number sentences and the number bond.



$$\begin{array}{r} \square = \square + \square \\ \square + \square = \square \end{array}$$

