

 $10 + 8 = 18$	 $10 + 7 = 17$	 $10 + 6 = 16$
 18 10	 17 10	 16
<hr/>		
 $10 + 5 = 15$	 $10 + 1 = 11$	 $10 + 0 = 10$
 15	 11	 10
<hr/>		
 $10 + 2 = 12$	 $10 + 1 = 11$	 $10 + 0 = 10$
 12	 11	 10

Name _____

Date _____

Use your materials to show each number as 10 ones and some more ones.
Use your 5-groups way of drawing.

1 5

1 3

Ten seven

Ten one

1 2

1 6

2 ten

Ten four


Name _____

Date _____

For each number, make a drawing that shows that many objects.

Circle 10 ones.


11




16

20

19



14



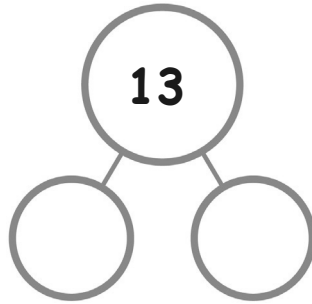
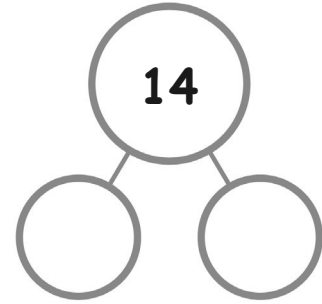
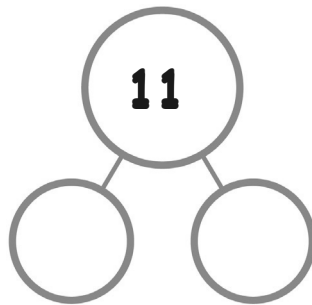
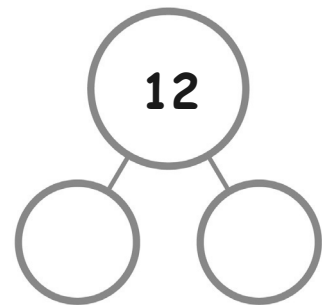
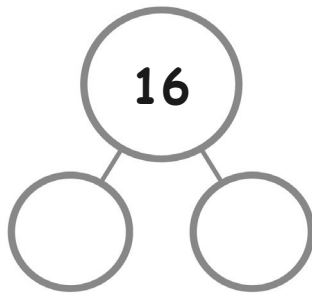
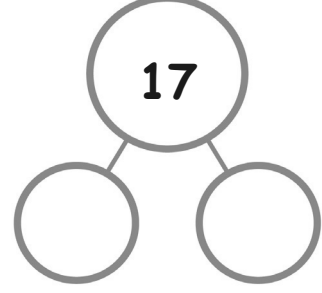
12



Name _____

Date _____

Color the number of fingernails and beads to match the number bond. Show by coloring 10 ones above and extra ones below. Fill in the number bonds.

Name _____

Date _____

Write the missing numbers. Then, count and draw X's and O's to complete the pattern.

O O O O O O O O O O O	X O O O O O O O O O O		X X X O O O O O O O O		X X X X X O O O O O O O				X X X X X X X X X O O O O O O O	
10		12		14		16	17	18		20

Name _____

Date _____

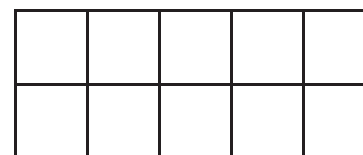
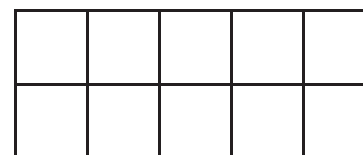

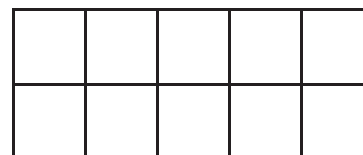
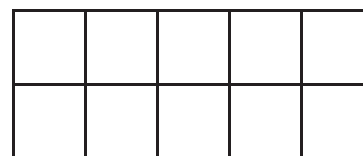
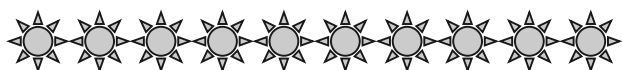
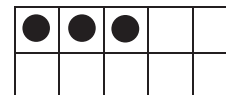
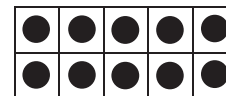
Write the missing numbers. Then, draw X's and O's to complete the pattern.

X X X X X X X X X X O O O O O O O O O O O	X X X X X X X X X X O O O O O O O O O O O		X X X X X X X X X X O O O O O O O O O O O			X X X X X X X X X X O O O O O O O O O O O				X O	
20		18		16		14	13	12		10	

Name _____

Date _____

Count the objects. Draw dots to show the same number on the double 10-frames.



A grid of 12 fish arranged in 3 rows and 4 columns. The first two rows have fish with 'P' on their sides, and the last row has fish with 'C' on their sides. An arrow points to two empty 2x5 grids.

A grid of 21 apples arranged in 5 rows. The first four rows have 4 apples each, and the fifth row has 3 apples. An arrow points to two empty 2x5 grids.